


English :

Task 1 - Read page 46 and do page 47 in English Reader (Monday).

 **Comprehension**

Quick Recap


A. Answer these questions.

1. What does the boy do with the doll?
2. What does the boy say 'sorry' for?
3. Who gives a lolly to whom?






Ponder

B. Think and answer.

1. Why is the boy called naughty?
2. Why does the child in the poem smile at the naughty boy?

 **Way with Words**

A. Look at the pictures. Then, match the words that can be used to describe these things.

	A	B	
	1. loud	a. tree	
	2. big	b. wall	
	3. round	c. car	
	4. red	d. coin	
	5. dirty	e. noise	

RHYMING WORDS
The words **doll** and **wall** have the same ending sound. These words rhyme.
The words that have the same ending sound are called **rhyming words**.

47

Task 2 - Do pages 48 and 49 in English Reader (Wednesday).

Maths :

Task- Do pages 66 and 67 in maths book.





1. Sort out the following things and rewrite in the Correct

Group:

Saucer	Bear	Mango	Potato
Cat	Cup	Melon	Pumpkin
Toaster	Lion	Strawberry	Carrot
Giraffe	Peas	Pomegranate	Spoon

- (a) Animals: _____
- (b) Fruits: _____
- (c) Vegetables: _____
- (d) Kitchen Equipment: _____

2. Which is more? Put a tick (✓):

- (a)   _____
- (b)   _____

3. Put right numeral in the box:

- (a) 1 more than 9 is .
- (b) 2 more than 17 is .
- (c) 3 less than 8 is .
- (d) 5 is 2 less than .
- (e) 1 more than 5 is .

* Time and marks may be assigned by the teacher.

4. (a) Write 6 numerals in increasing order from 4:

(b) Write 4 numerals in decreasing order from 10.

5. Complete the sentences:

(a) 9 comes before _____ and after _____.

(b) 15 is between _____ and _____.

(c) _____ is in between 9 and 11.

(d) 20 is 1 more than _____.

(e) 6 and 6 make _____.

6. Write the geometrical shape of:

(a) Blackboard _____

(b) Football _____

(c) Wheel of a car _____

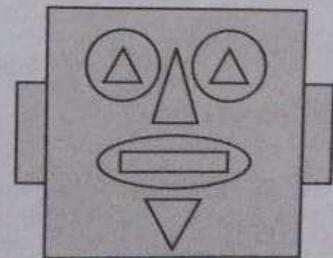
(d) Top of a ludo dice _____

(e) Shape with three sides only _____

7. Count shapes and write their names and numbers:

Name

Number



Hindi :

अभ्यास कार्य

गुंजन हिन्दी पाठमाला का पृष्ठ - 86 करें।

अभ्यास

उत्तर लिखो—

क. मानव और रत्ना क्यों खुश थे ?

.....

ख. घर से मेट्रो स्टेशन तक कैसे गए ?

.....

ग. ई-रिक्शावाला रिक्शा चलाते समय क्या कर रहा था ?

.....

घ. रत्ना ने ई-रिक्शावाले से क्या कहा ?

.....

दो-दो वाहनों के नाम लिखो—

सड़क पर

आसमान में

पानी में

.....

.....

.....

.....

.....

.....

सुनकर लिखना—

टिकट

टोकन

मेट्रो

मॉल

रिक्शा

स्टेशन

प्लेटफॉर्म

आइसक्रीम



आपने दिए गए किस किस वाहन में यात्रा की है उनका चित्र देखकर नाम लिखें और किसी भी एक वाहन का चित्र बनाकर या चिपकाकर उसमें की गई यात्रा का अनुभव लिखें -

1.



2.



3.



4.



5.



UOI :

Task 1 - Make a mind map on measures to prevent pollution (Monday).

Task 2 - Reflect on the virtual trip(on sheet)(Wednesday).

ART :

Draw and color any one means of transportation of your own choice. Use your creativity to complete the artwork (For eg. Car, aeroplane, ship etc).

Formative Assessment Criteria -

- 1.Choice of transportation
- 2.Creativity
- 3.Neatness

MUSIC :

Watch the video and learn the song-

<https://youtu.be/iFDpO9W4-i4>